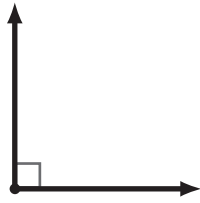


Angles and Degrees

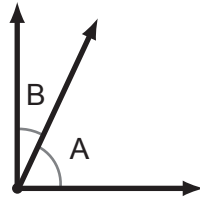
1 What is the size of this angle in degrees?



2 What is the size of this angle in degrees?

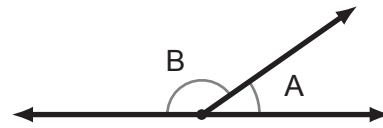


3 Find the unknown angle.



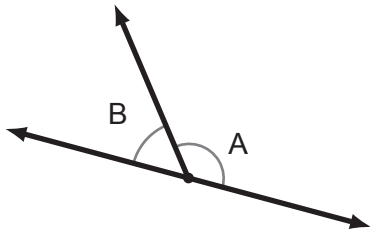
$\angle A$ and $\angle B$ are complementary angles.
If $\angle A$ is 65 degrees, how big is $\angle B$?

4 Find the unknown angle.



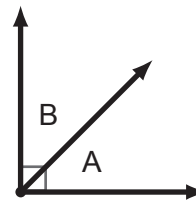
$\angle A$ and $\angle B$ are supplementary angles.
If $\angle A$ is 35 degrees, how big is $\angle B$?

5 Find the unknown angle.



If $\angle A$ is 128 degrees, how big is $\angle B$?

6 Find the unknown angle.



If $\angle A$ is the same size as $\angle B$,
how big is $\angle A$?